

HOME LINK
1•4


Telling Time



Family Note Today we discussed some of the tools used in mathematics. We reviewed how to read a ruler to the nearest inch and nearest centimeter and how to read a clock face to tell time to the nearest half-hour, nearest quarter-hour, and nearest 5 minutes. Help your child read and write each time.

Please return this Home Link to school tomorrow.


1. Draw the hour hand and the minute hand to show the time right now. Write the time.



_____ : _____


Write the time shown.

2.




_____ : _____

3.




_____ : _____

4.




_____ : _____

5.




_____ : _____

6.



_____ : _____

7.



_____ : _____

8. Show someone at home how you solved the hardest problem on this page.