

HOME LINK
1•13

Time Practice




Family Note Your child has been learning about elapsed time in this lesson.
 Please return this Home Link to school tomorrow.




Pretend you are setting your watch. Draw the hour hand and minute hand on the clock face to show the time. Use a real watch or clock to help you.


1. a. Show a quarter to 6.




b. Show the time 2 hours and 15 minutes later.




2. a. Show half-past 8.




b. Show the time 4 hours and 20 minutes earlier.



3. a. Show 25 minutes past 11.



b. Show the time 3 hours and 40 minutes later.



Practice

Solve.

4. $4 + \underline{\quad} = 8$

5. $\underline{\quad} = 8 - 4$

6. $14 = \underline{\quad} + 7$

7. $14 - \underline{\quad} = 7$