

HOME LINK
1•12

Frames-and-Arrows



Family Note You can find information about Frames-and-Arrows diagrams on pages 200 and 201 in the *Student Reference Book*.

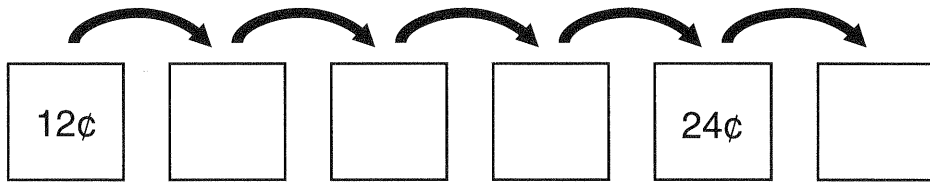
Please return this Home Link to school tomorrow.



Show someone at home how to complete these Frames-and-Arrows diagrams.

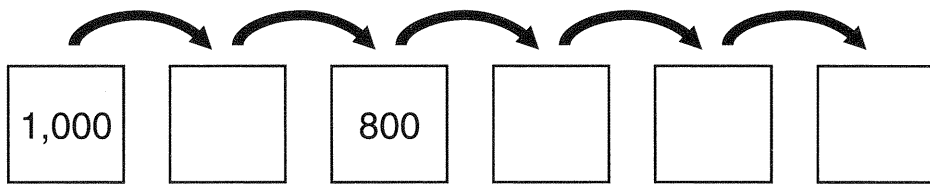
1.

Rule
+3¢



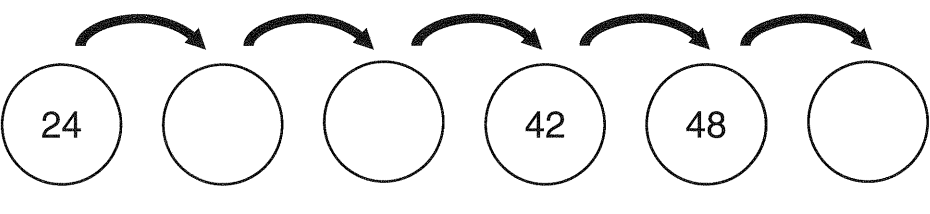
2.

Rule
-100



3.

Rule



Practice

Write each amount in dollars-and-cents notation.

4. $\boxed{\$1} \text{Q} \text{D} \text{N} \text{N} \text{P} = \$$ _____

5. $\text{D} \text{D} \text{Q} \text{N} \text{P} \text{D} \text{Q} \text{P} = \$$ _____

6. $\boxed{\$10} \boxed{\$1} \boxed{\$1} \text{N} \text{P} = \$$ _____

7. Draw coins to show \$0.89 in at least two different ways.
